

Swindon Town FC Community Foundation

KIDS ACTIVITY PACK

NAME

AGE

Eyes on the Ball: How many words from the world of football can you find?

J U Q N K A T H U M S N B W S
 O C F C W R T I M R W T Q U S
 M D Z N A O A G J I I U V S A
 F A X W O D J P S D N A N C P
 H P T H J T V L R H D I C H H
 A L S C G P H A N W O T F O D
 R E T C H N U G N N N E Z O L
 V D G S R U I G I C R V C L U
 U A E N C L A N J L E U B W M
 C S S T R O H S I S D D T C M
 R T C O J A Y V C A H O K I C
 O R O W E L I T E A R I O R A
 S O R B S S D C R W D T R L O
 S J E W A Z G O A L O G T T F
 Q G M R F Y V C L U B O H E J

CROSS
 TRAINING
 SCHOOL
 CLUB
 MATCH
 PARK
 TURN
 SWINDON
 ADVANCED
 FLOODLIGHT
 SHIRT
 SHORTS
 PASS
 TOWN
 GOAL
 SHOOT
 SCORE
 ELITE
 MINI
 ASTRO

Can you fit some of the words from above in to the sentences below?

After finishing _____ on a Friday, I'm excited because tomorrow I'm going to watch _____ Town play. I love going to the County Ground on a _____ day. There is so much noise when Swindon _____ a _____. Before the game I'm hoping to get my own _____ with my name on the back, then I could wear it to the next after school _____.

DESIGN YOUR OWN KIT!

What amazing design can you come up with for a Swindon Town FC football kit?





Swindon Town FC
Community Foundation

MATHS



Swindon Town FC
Community Foundation

Below is list of results from six different football matches

| | | | | |
|--------------------------|----------|----------|----------|-------------------------|
| SWINDON TOWN | 3 | - | 1 | GRIMSBY TOWN |
| TOTTENHAM HOTSPUR | 0 | - | 1 | NEWCASTLE UNITED |
| HULL CITY | 0 | - | 4 | LEEDS UNITED |
| LEICESTER CITY | 5 | - | 0 | NEWCASTLE UNITED |
| ROTHERHAM UNITED | 2 | - | 2 | AFC WIMBLEDON |
| SALFORD CITY | 2 | - | 3 | SWINDON TOWN |

1. How many goals were scored by the home teams?

2. How many goals were scored by the away teams?

3. How many goals were scored in total?

If a win is worth 3 POINTS, a draw is worth 1 POINT and a loss gets 0 POINTS then work out how many points each team would get from the above matches, and circle the team that won the most points!

| | | | |
|-------------------------|----------------------|--------------------------|----------------------|
| Swindon Town | <input type="text"/> | Tottenham Hotspur | <input type="text"/> |
| Grimsby Town | <input type="text"/> | Newcastle United | <input type="text"/> |
| Leeds United | <input type="text"/> | Hull City | <input type="text"/> |
| Leicester City | <input type="text"/> | AFC Wimbledon | <input type="text"/> |
| Rotherham United | <input type="text"/> | Salford City | <input type="text"/> |

MATCH THE KITS!


Can you match the kit to the correct team? Draw a line from the shirt to the team name! Bonus challenge: Can you colour in each shirt the right colours?



CAMBRIDGE UNITED



BRADFORD CITY



SWINDON TOWN



OLDHAM ATHLETIC




GRIMSBY TOWN

GUESS THE FOOTBALLERS


Can you guess who these Swindon Town FC Footballers are? Write their names underneath!




1.



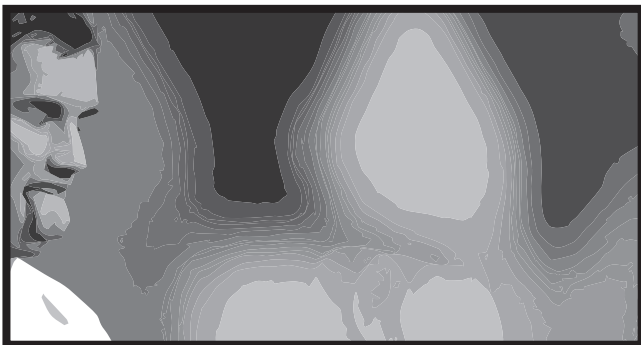
2.



3.



4.



5.



6.



Swindon Town FC
Community Foundation

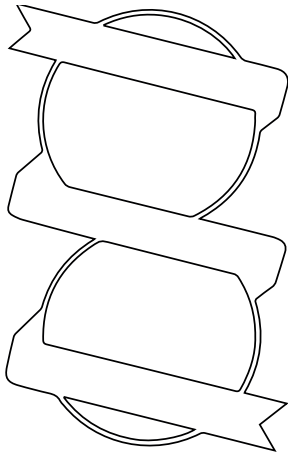
COLOUR ROCKIN' ROBIN!




Swindon Town FC
Community Foundation




The words and pictures are all missing from these EFL club badges! Can you work out which team each badge belongs to?
Bonus challenge: can you colour and draw the details missing from each badge?




1.



2.




3.



4.



5.




6.




THE MAZE

Can you help Rockin' Robin get back to the County Ground?



Did you help him get back safely?



DOT TO DOT

Can you complete the picture of the Ginger Pele by following the numbers? When you're finished write his name underneath the picture!



SPOT THE DIFFERENCE

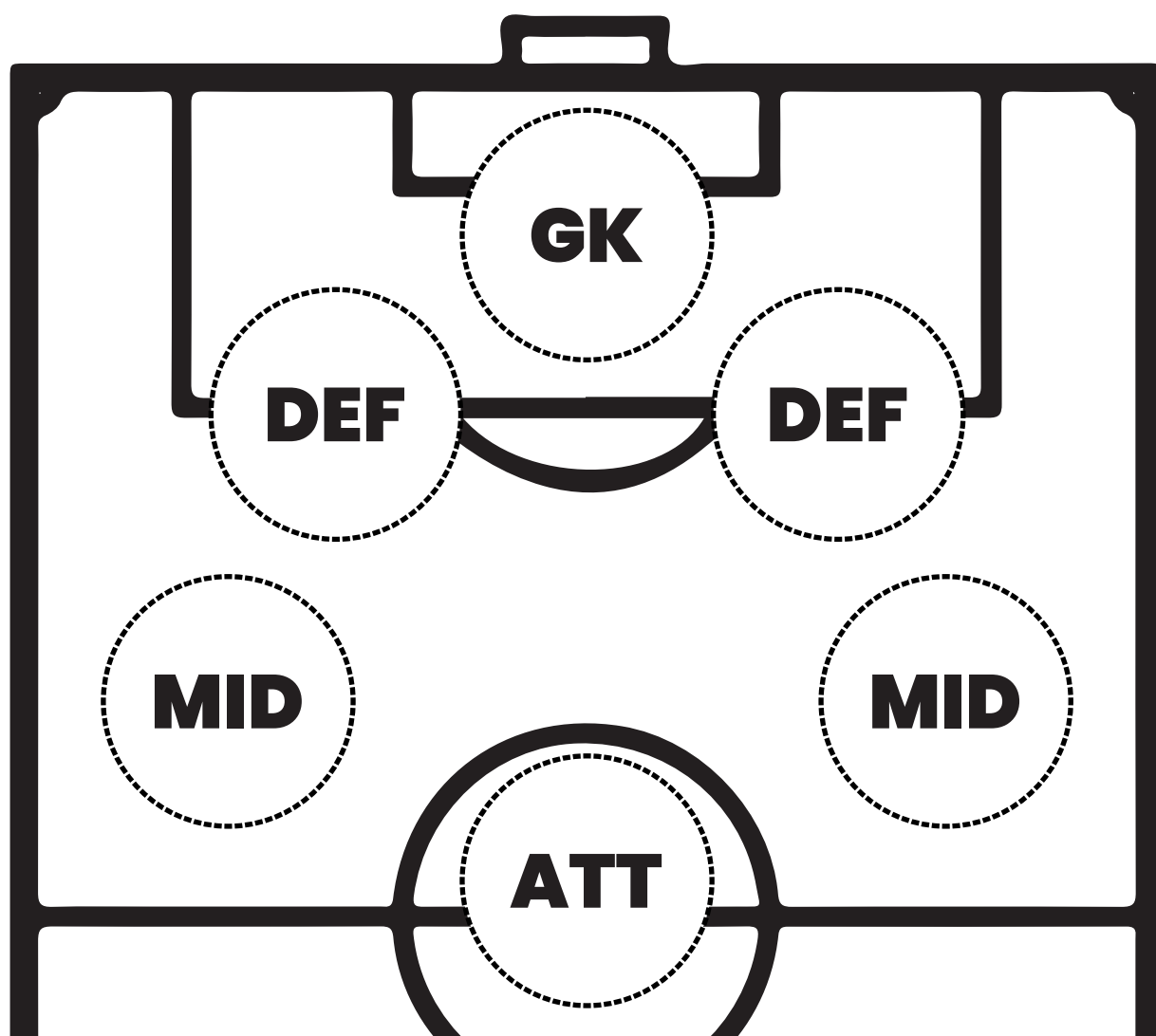

Can you find **SIX** differences between the two pictures of midfield powerhouse Anthony Grant?



- | | |
|----------|----------|
| 1. _____ | 4. _____ |
| 2. _____ | 5. _____ |
| 3. _____ | 6. _____ |

SAFARI SIX-A-SIDE!

Choose your own six-a-side team from the animals below and cut and stick them into their positions on the pitch! How would an orang utan's long arms come in handy? What could go wrong with a rhino heading the ball? Think about what could make the other animals useful during a football match, and why you would put them in certain positions!





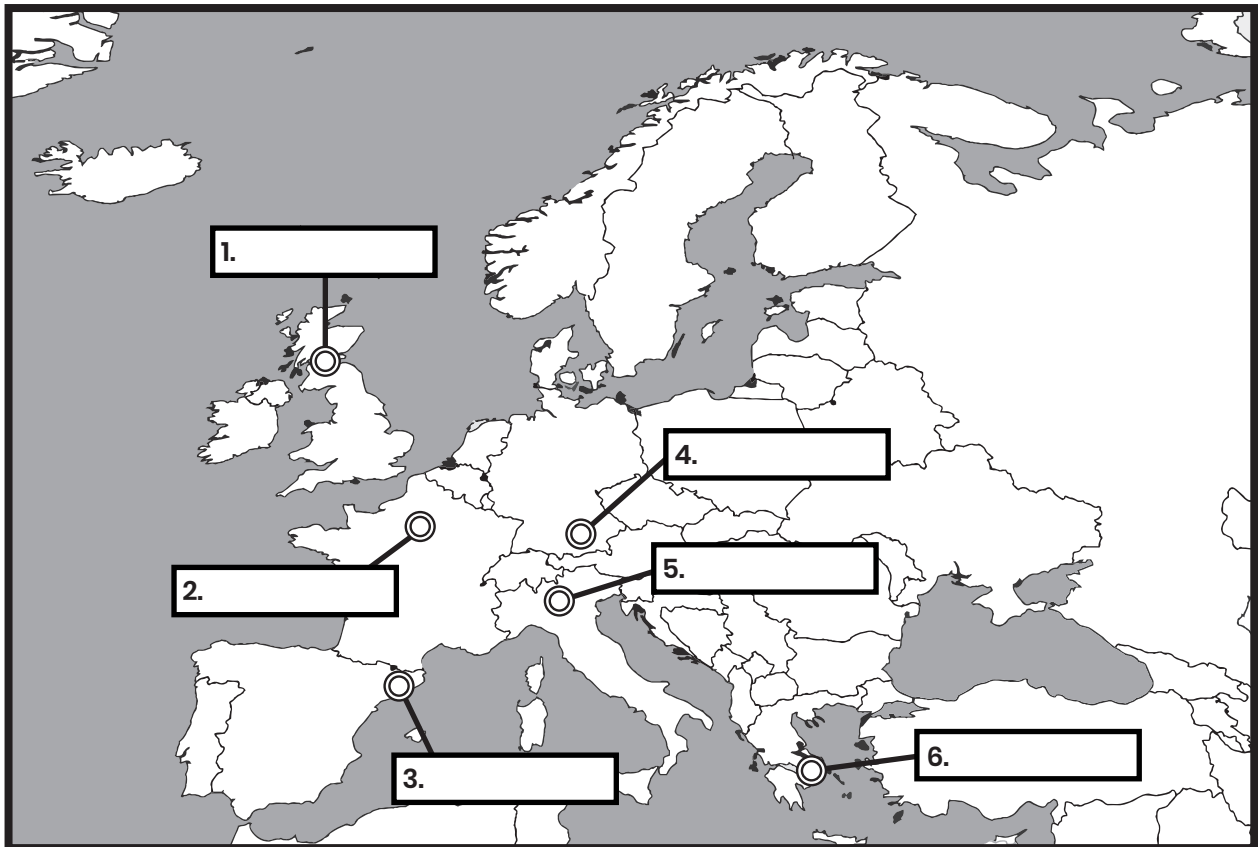
Swindon Town FC
Community Foundation

FOOTBALL GEOGRAPHY



Swindon Town FC
Community Foundation

Can you find all of these European clubs on this map of Europe? Bonus challenge: can you write the name of the country they're in next to the team?



BARCELONA _____

GLASGOW RANGERS _____

PARIS SAINT GERMAIN _____

OLYMPIACOS _____

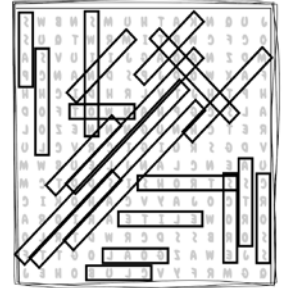
BAYERN MUNICH _____

AC MILAN _____

SOLUTIONS (USE A MIRROR TO SEE THE ANSWERS!)

EYES ON THE BALL

club!
 After finishing school on a Friday, I'm excited because tomorrow I'm going to watch Swindon Town play. I love going to the County Ground on a match day. There is so much noise when Swindon score a goal. Before the game I'm hoping to get my own shirt with my name on the back, then I could wear it to the next after school



MATHS

Wimbledon - 1, Salford, 0. Swindon won the most points!
 Rotherham - 1, Tottenham - 0, Newcastle - 3, Hull - 0,
 Swindon - 6, Grimsby - 0, Leeds - 3, Leicester - 3

1. Twelve
 2. Eleven
 3. Twenty-Three

GUESS THE FOOTBALLERS

1. Eoin Doyle 2. Anthony Grant 3. Steven Benda 3.
 Paul Caddis 4. Jerry Yates 5. Mathieu Baudry

MATCH THE KITS



DOT TO DOT




CLUB BADGES



SPOT THE DIFFERENCE



THE MAZE



FOOTBALL GEOGRAPHY

1. Glasgow Rangers (Scotland, UK)
2. Paris St. Germain (France)
3. Barcelona (Spain)
4. Bayern Munich (Germany)
5. AC Milan (Italy)
6. Olympiacos (Greece)

How well did you do? Make sure you let us know on our Facebook and Twitter - @2STFCFoundation!